

ORDERING

KS1 – 2001 Paper

1.

27 Write **3** of these numbers in the empty boxes.


The numbers in the boxes must be in order.

309 410

 908

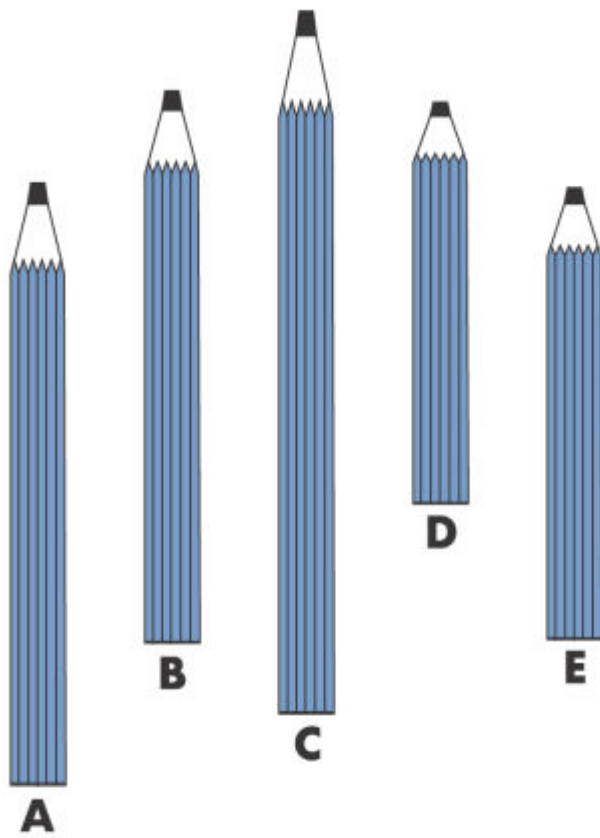
701 1000

| | | | | |
|---------|--|--|--|----------|
| 998 | | | | 340 |
| largest | | | | smallest |



KS1 – 2002 Paper

2.



Pencil **C** is the longest pencil.

II Order the rest of the pencils.

You may use a ruler.

| | | | | | |
|----------|--|--|--|--|----------|
| longest | | | | | shortest |
| C | | | | | D |

13 Here are some numbers.

43 89 64 ~~28~~ 51

Write the numbers in order.

One is done for you.

smallest

largest

28



KS1 – 2003 Paper 2

4.

12 Look at these digit cards.



a Use each card **once** to make the **largest** number.

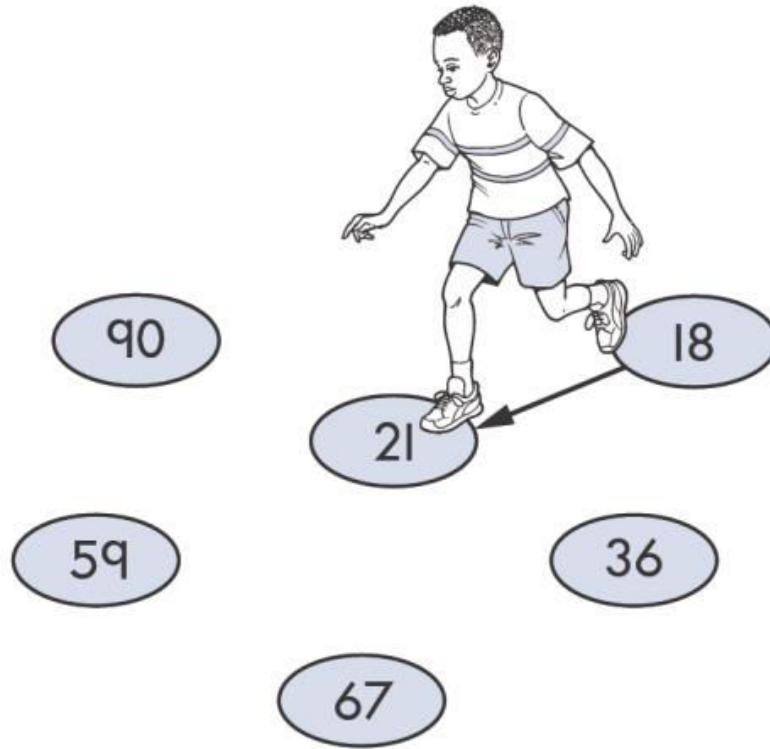
Three empty square boxes are arranged horizontally, intended for the student to write the digits of the largest number possible using the cards 8, 9, and 7.

b Use each card **once** to make the smallest **even** number.

Three empty square boxes are arranged horizontally, intended for the student to write the digits of the smallest even number possible using the cards 8, 9, and 7.

7 Desi walks on all the numbers from **smallest** to **largest**.

Draw arrows (→) to show the path he takes.



8 Write these numbers in the circles.

All the numbers must be in order.

310 93 281

A horizontal sequence of seven circles. The first circle contains the number 13 and is labeled "smallest" below it. The second circle is empty. The third circle contains the number 280. The fourth circle is empty. The fifth circle contains the number 287. The sixth circle is empty. The seventh circle contains the number 492 and is labeled "largest" below it. To the right of the seventh circle, on a separate light blue vertical bar, is a small white circle.

7

Ling is going to write these numbers **in order**.

45 54 32 23 40

What number must she write in the white box?

| | | | | |
|--|--|--|--|--|
| | | | | |
|--|--|--|--|--|

smallest

largest

KS1 – 2005 Paper 2

8.

17

Kiz has these numbers.

1330 1303 1033 1003 1030

He writes them in order **from smallest to largest**.

What is the **fourth** number he writes?

| |
|--|
| |
|--|

KS1 – 2017 Paper – Reasoning

9.

6

Write these numbers in order, starting with the smallest.

73 37 76 36 63

| | | | | |
|--|--|--|--|--|
| | | | | |
|--|--|--|--|--|

smallest

largest



1 mark

KS1 – 2022 Paper – Reasoning

10.

7

Put these numbers in order from smallest to largest.

One is done for you.

76 84 27 45 ~~18~~

| | | | | |
|----|--|--|--|--|
| 18 | | | | |
|----|--|--|--|--|

smallest

largest



1 mark